




EXEMPLARY WORK



Mildenhall College
ACADEMY



Je m'appelle Jérémy.
J'adore le ski et le football.
J'aime jouer au jeu.
J'ai deux ans.
J'habite avec ma mère et mon père.
J'habite aussi avec le bébé.
Le bébé est adorable.
J'aime écouter de la musique parce que c'est assez relaxant.
Mon père est amusant et intelligent.
Mon autre s'appelle Jérôme.
J'appelle Ari, il est amusant.

Je parle anglais.
J'aime dans le bain.
J'adore le dessin.
Je habite mon collège.
Mon anniversaire c'est le 15 mai.
mon frère est de la même école.
Je n'ai pas mon frère, c'est regret.
C'est un "international".
Mon frère est un bon joueur de football.

Model answer: Je m'appelle Jérémy. J'habite à Lyon, aussi actif mais ma mère J'adore jouer au netball, déteste regarder la télé.

Writing: about 40 words

Marks	
9-10	4 BPs answered
7-8	

Fantasy Life: A good range of food and resources here is used. 😊





• Je m'appelle Jess et quand il fait beau, j'adore porter une jupe jaune et un t-shirt bleu avec mes sandales blanches.
• D'habitude, je vais en vacances en Grèce avec ma mère et mon père parce qu'il y a du soleil. Je vais au bord de la mer.
• J'adore faire de la natation c'est vraiment amusant!
• Mais je n'aime pas ^(next year) l'année dernière je voudrais ^{aller en} du camping parce que ennuyeux aussi ce n'est ~~pas~~ mon truc.

WWW	EBI
1. use opinions	1. add the missing bullet point
2. use of the present tense	2. add missing opinions
3. accurate spelling	3. add missing reasons
4. use 2+ different connectives	4. Add 1/2 different connectives
5. use 1+ intensifier	5. add an intensifier
6. 2+ different reasons	6. add a Time Frame
7. Use a Time Frame	7. add a negative sentence
8. answering the bullet points	8. correct spelling/accents
9. a strong range of vocabulary (avoids repetition)	9. Add in missing verbs
	10. Change the highlighted words to your own choice rather than copying

Effort incroyable Jess!!

YEAR 8, 9 & 10 FRENCH

Answer either Question 4.1 or Question 4.2 or Question 4.3
You must only answer one of these questions.

EITHER

041

Theme 1 – Identity and culture

Vous emailiez votre correspondant(e) français(e) sur vos ami(e)s et la technologie.

Décrivez :

- vos rapports avec vos ami(e)s
- votre réseau social préféré
- vos activités sur votre portable hier soir
- vos projets avec vos ami(e)s le week-end prochain.

Ecrivez environ 90 mots en français. Répondez à chaque aspect de la question. [16 marks]

Mes amis adorent la technologie, parce que on peut parler. Nous chattons sur l'Internet et chaque fois je aime surfer. Quelquefois, elle trouve barbant.

Mon réseau social préféré, c'est Instagram, puisque je peux parler avec mes amis et avoir des photos. Ce n'est pas trop génial.

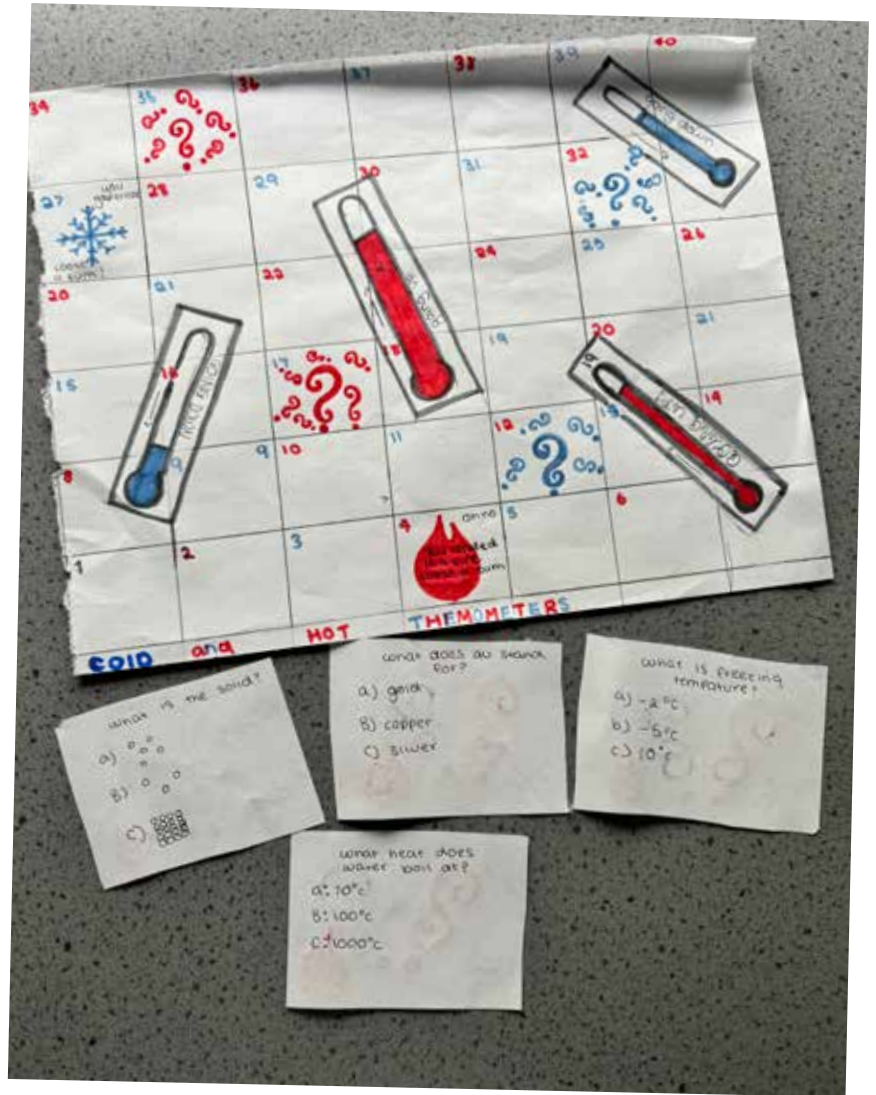
Hier soir, j'ai téléphoné mes amis et ~~je~~ c'était super. A priori j'étais beaucoup de la m... car c'est assez sympa.

- Holidays destination
- Sports
- Cinema
- My town

Je pense que l'anglais c'est très intéressant et amusant, cependant je déteste les mathématiques parce que c'est ennuyeux. Je vais en vacances en Ecosse car c'est vraiment beau. Mais assez il fait froid! D'habitude je joue au tennis avec ma mère et mon frère. C'est super! J'adore le tennis. Hier, je suis allé au cinéma avec mes amis. Mais c'était ennuyeux. Dans ma ville on peut jouer au foot ou faire de la natation à la piscine. J'habite à Mildenhall. C'est très tranquille mais assez barbant. J'aime regarder la télé car c'est relaxant.



SCIENCE



YEAR 9 & 10 SPANISH



No me gustaria ser profesora porque no me gustan mucho de ninos pero muchos son muy bonitos. Ser una profesora tambien es muy ~~estas~~ chifli porque es ^{muchas} horas de trabajo. Pero mi gustaria ser una madre. Por que laa pienso que es muy interesante y bien pagado. Me gusta leer libros durante la hora de comer porque es muy silencioso y tranquilo. Me gusta ^{mucho} ~~anda~~ mas ^{si} se es un libro con jets. Durante la hora de comer ^A mis mejores amigas y ^{yo} ~~encantamos~~ ^{hablar} ~~jalar~~ de vacaciones. Me gustaria ir de vacaciones a la playa porque me encanta nadar con mi hermano pequeño y mi hermana mas grande. Pero mi madre no le gusta. Ella le gusta ir a la piscina porque es mas comodo. Tengo cinco estudios en la escuela pero no me gusta el de historia es ~~mucho~~ ^{extremadamente} aborrido para mi. Me chifla la clase de deportes por otra lado porque mi gusta mi profesora y estan ~~es~~ ajera.

END OF QUESTIONS

Task 2: (10 marks)

Write an email to your Chilean friend about your school and career aspirations.
Write approximately 50 words in Spanish.

You must write something about each bullet point.

Mention


- Healthy diet
- Free time activities
- cinema
- Job
- Holidays

Hola. Es Jess. Me gusta comer ~~sa~~ ^{es} ensalada porque es muy sana. ~~Me~~ Normalmente, escucho musica y juego balanc. esto es divertido. Me encanta ver ~~pero~~ pelicula terror pero mi favorito es pelicula de accion. Me gustaria ser peluquera porque es importante y interesante. Me gusta voy de vacaciones en espana porque es ~~+~~ en mi opinion muy relajante. ~~g~~ ^{adios}!

Task 3: (5 marks)

Using your knowledge of grammar, complete the following sentences in Spanish.

1. Me gustan mucho ^{las} ~~matem~~ ^{matematicas}.





PE



04.1 A researcher wanted to investigate the effect of context on the accuracy of memory.

Describe how she could design a laboratory experiment to do this.

You need to include the following information in your answer:

- a task that she could ask participants to carry out and a description of the data she would collect
- what the conditions of the independent variable would be
- one extraneous variable that could affect the results and how the researcher could control this variable.

(6 marks)

She can design a laboratory experiment to investigate the effect of context on the accuracy of memory by setting up using a lab and having two conditions. Condition 1 she would have sit in a blue room and learn a list of words. Then condition 2 she would sit in a pink room and learn a list of words. There would be a sample of 30 people and select from an opportunity sample to be convenient. Condition one would then recall in the pink room and the other half would recall in the same blue room. Condition 2 she would recall in the blue room and the other half of condition 2 would recall in the pink room. The type of data she would be collecting is primary and quantitative data because she is collecting the data herself and is measuring how often participants are recalling words correctly in the same or different contexts. The independent variable is the context in which participants are recalling in. An extraneous variable would be participants focusing on the fact that they are in a room which is fully pink or blue because they are distracted from the actual task. The researcher would control this variable by reminding the participants of the task that they need to focus on.

Task + description of data (2 marks)

IV + conditions (2 marks)

EV + how to control this (2 marks)

Great knowledge + application to task. Well done Anna.

23

One of the diaries included the following extract.

Managed to drag myself out of the house yesterday but wished I hadn't. Went to the shop but dropped my change at the till. Everybody knew I was useless. Why can I not do anything right? No one else I know does such stupid things.

16 Ellis proposed an ABC model of depression. Outline and evaluate the ABC model of depression. Refer to this diary extract in your answer.

(8 marks)

A01 • The ABC model of depression involves the activating event that causes the depression - this could be losing their job or a close loved one. The next part is the beliefs, the person with depression would have increasingly negative thoughts - linked to catastrophic thinking where the person only considers the negatives and thinks everyone else views them the same way. The final part of the model is the consequence, these are the emotional and behavioural consequences that are known as depression.

A02 In this case the activating event would have been dropping the change at the till as it caused a sudden stress and worry. The beliefs would have been that 'everybody knew I was useless'. This negative thinking could have consequences and direct being the thought that the person never knew what it felt like to be happy.


24

A03 A strength of the ABC model is that it has real world application. This is seen in its contribution towards the development of Rational Emotive Behavioural Therapy (REBT). This suggests that the model is used to identify the depression and try to rationalise the thoughts. This suggests that the ABC model is good to be used in clinical settings.

A03 A weakness of the ABC model is that it does not fully explain cases of depression as there are no clear activating events. This means that cases of depression that are genetic cannot be explained by the ABC model. This is because the ABC model does not explain the biological side of depression.

Extra space

SOCIAL
SCIENCE



MUSIC



MATHS



12 Points A, B and C lie in a straight line in that order on horizontal ground. A box of mass 5 kg is pushed from A to C by a horizontal force of magnitude 8 N. The box is at rest at A and takes 3 seconds to reach B. The ground is smooth between A and B. Between B and C the ground is rough and the resistance to motion is 28 N. The box comes to rest at C. Determine the distance AC.

14

Diagram 1: A box is pushed from A to B by a horizontal force of 8 N. The ground is smooth between A and B. The box reaches B with a velocity of 4.8 m/s.

Diagram 2: A box is pushed from B to C by a horizontal force of 8 N. The ground is rough between B and C, with a resistance to motion of 28 N. The box comes to rest at C.

AB

Force diagram: 8 N (right), 25 N (left)

$F = ma$

$8 = 5a$

$a = 1.6 \text{ m/s}^2$ (B1)

$u = 0$

$t = 3$

$v = u + at$

$v = 4.8$

$s = ut + \frac{1}{2}at^2$

$s = 2.2$

$AB = 2.2\text{ m}$ (M1)

$v = u + at$

$v = 4.8$ (M1)

BC

Force diagram: 8 N (right), 28 N (left)

$F = ma$

$8 - 28 = 5a$

$-20 = 5a$

$a = -4 \text{ m/s}^2$ (A1)

$u = 4.8$

$v = 0$

$t = ?$

$v^2 = u^2 + 2as$

$0 = 4.8^2 + 2(-4)s$

$0 = 23.04 - 8s$

$8s = 23.04$

$s = 2.88$

$BC = 2.88\text{ m}$ (A1)

AC

$AC = 2.2 + 2.88$

$AC = 5.08\text{ m}$ (A1)

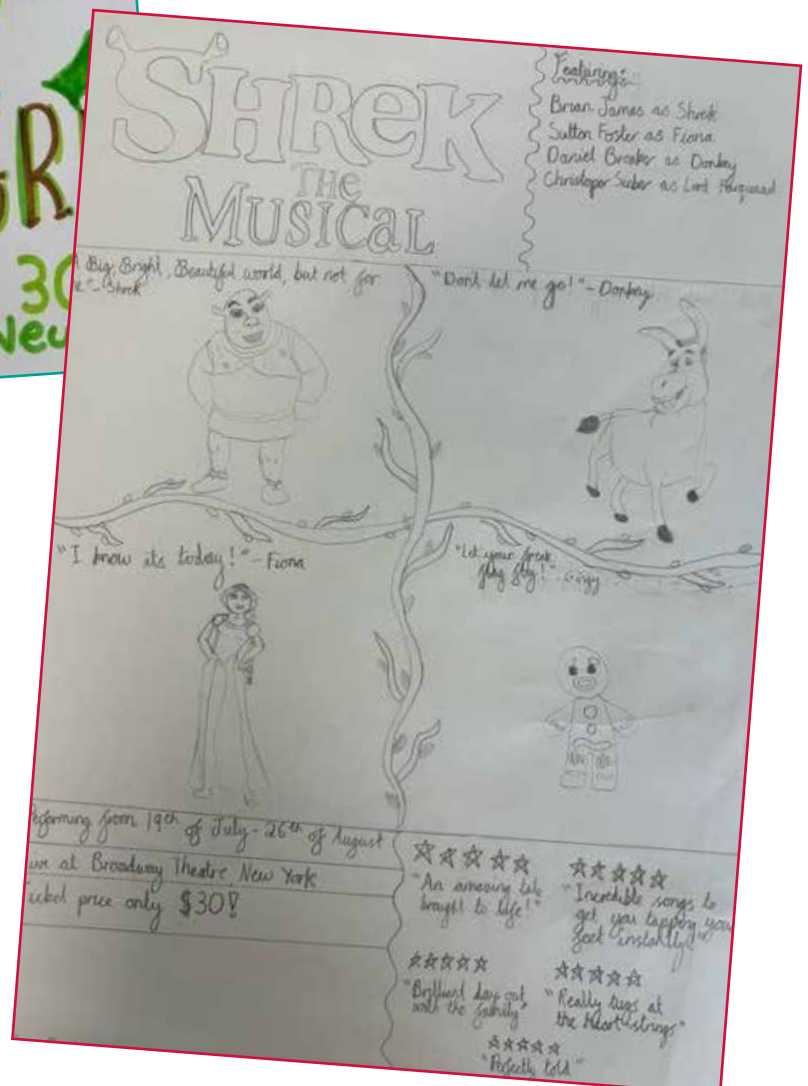
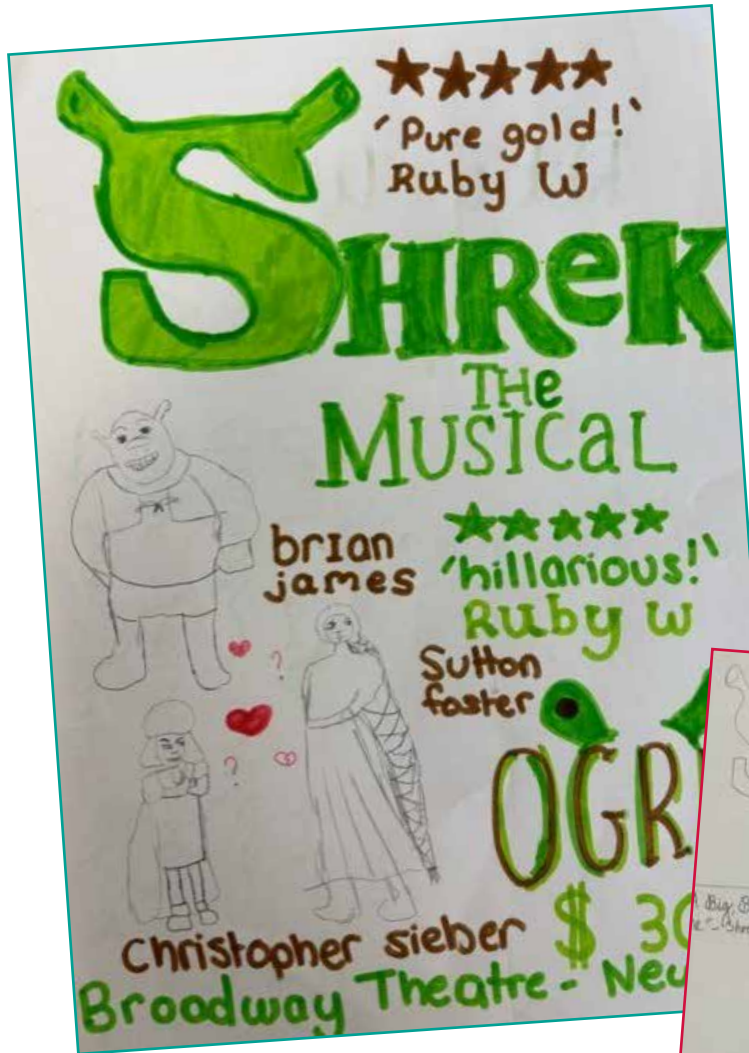
Perfect answer Logan! (8/8)



ART



DRAMA



ENGLISH



It restarted before it stopped

Darkness that once surrounded the forest began to slough jade as they opened their eyes, a big worried breath escaping their mouths, rugged and uneven then looked down at their palms, eyeing their skin. They seemed fine. The sun approached. Each second they waited the closer the minute became spinning behind them, it was audible now.

A sickle June from beyond the shadows.

I found all the deepening cracks below me as my fingers continued to scrape against the jagged shards of rock for purchase stability. The risk of falling at this point was lethal. It felt as if my last muscles had been set on fire, but even so, I continued to climb higher and higher.

The climb felt exponential. My eyes travelled downwards, no matter how hard I tried to stop them, and it felt as if all my breath had evaporated.

The ground below slumped into a void of illusion, rapidly sinking into itself. What was once fields of fields of dead, rusted grass, mud dappled with a dead and plants as wilted as bleached spinach, now stood as a hole of black nothingness. Even the breathing being clawed into itself, invisible hands pulling it down, down, down. The sky was dark, as if clouded by grief for what was a what was forever lost.

P1: describe setting. P2: introduce main characters. P3: describe animal. P4: climax. P5: Fall.

The Savannah stood still in the stillness of the morning heat which was baking down like ^{pudding} ~~pudding~~ of steam from a boiling kettle ~~as the sun~~ ^{the sun} stood looming over the horizon like a ^{lion} ~~lion~~ ^{shadows} ~~shadows~~ for its presence. A sudden sound ~~moment~~ broke the still haze, the rhythmic ^{stomping} ~~stomping~~ of the still haze, elephants appeared moving along the horizon like a ^{herd} ~~herd~~ ^{trapped in} ~~trapped in~~ ^{hazy} ~~hazy~~.

The slow progress of the herd was

You are advised to plan your answer to Question 5 before you start to write.

(Plan: human meeting an animal, something by a ^{road} ~~road~~ on a hot day, hearing an animal crying, track for an animal, hand will be help.)

It ^{felt like} ~~was~~ the hottest day in history. The sun's warmth blazed and burned my skin as if cooking it. The bright and dangerous sunrays hit today like a ^{flack} ~~flack~~ as it even melted the dried up ^{gum} ~~gum~~ on the floor. As I stretched ~~the heat~~ ^{the heat} coars ^{screamed} ~~screamed~~ past me, it was likely that the nightmare heat burned the engine like it was ^{hell} ~~hell~~. Even the birds singing and chirping subsided as the bird in ^{the} ~~the~~ shadows of bushes, trees and engulphed they could possibly find. The empty soft blue sky was ^{void} ~~void~~ of birds and any sort of flies.

I forced myself to keep walking as cars whizzed past me, my steps were and I dragged my feet across the floor. My skin was ^{raw} ~~raw~~ and not burned.



HEALTH AND SOCIAL CARE



Handwashing

The purpose of handwashing is to remove germs and bacteria from our hands. These bacteria can be easily picked up by touching other surfaces or coming into contact with other people. People are frequently touching their eyes, nose and mouth without even realising it. Therefore making it an obvious every way for infections to enter, the infections can then be spread by touching it on to others through physical contact which can spread diseases such as food poisoning, flu or shingles.

Handwashing is the most important method of preventing infections. It should be done on a regular basis. It's one of the most effective ways to prevent the spread of germs.

Soap and water work together to trap and remove germs and chemicals from hands, soaping your hands with clean water before applying soap helps you get a better lather than applying soap to dry hands.

FUN FACT

A large percentage of healthcare workers are guilty of contaminated hands.

Researchers estimate that if everyone routinely washed their hands, 1 million deaths a year could be prevented.

Steps to washing your hands:

1. Wet your hands with clean, running water (warm or cold), and turn off the tap.
2. Apply soap and rub your hands by rubbing them together.
3. Use one hand to rub the back of the other hand and then to rub between the fingers. Do the same with the other hand.
4. Grip the fingers of each hand together with the backs of your fingers against the palms of your other hand.
5. Clean all surfaces of your hands, wrists, fingers etc.
6. Rub your hands for at least 20 seconds.
7. Rinse your hands using a clean towel or an air dryer.
8. If using a towel, remove the towel.



Cardiac Cycle

The cardiac cycle refers to the pattern of contraction and relaxation of the heart during one complete heartbeat.

Each stroke of the heart muscle is known as a **systole** and relaxation of the heart muscle is called **diastole**.

Systole - The phase of the heartbeat when the heart contracts and pumps blood from the ventricles into the arteries.

Diastole - The phase of the heartbeat when the heart relaxes and allows the chambers to fill with blood.

Parts of the Heart

The heart is made up of two upper chambers and two lower chambers. The right side of the heart pumps the blood to the lungs to collect oxygen and the left side pumps blood around the body and deoxygenated blood returns from the body to the right side.

The heart is divided into four chambers: the right and left atria and ventricles. The right atrium receives deoxygenated blood from the body and pumps it into the right ventricle, which pumps it to the lungs. The left atrium receives oxygenated blood from the lungs and pumps it into the left ventricle, which pumps it to the rest of the body.

The heart is also divided into two main parts: the right heart and the left heart. The right heart pumps blood to the lungs, and the left heart pumps blood to the rest of the body.

The heart is also divided into two main parts: the right heart and the left heart. The right heart pumps blood to the lungs, and the left heart pumps blood to the rest of the body.

Endocrine and prevent the spread of infection

Endocrine is the system of glands that secrete hormones into the bloodstream. Hormones are chemical messengers that travel through the blood to target organs and tissues, where they regulate various bodily functions. The endocrine system works in conjunction with the nervous system to maintain the body's internal balance.

Prevent the spread of infection: Infection is caused by microorganisms (bacteria, viruses, fungi, etc.) that enter the body. To prevent infection, it is important to practice good hygiene, such as washing hands regularly, avoiding contact with sick people, and keeping wounds clean.

Endocrine and prevent the spread of infection: The endocrine system plays a role in the body's immune response. Hormones like cortisol can help to reduce inflammation and prevent the spread of infection. However, excessive use of corticosteroids can suppress the immune system and increase the risk of infection.

Endocrine and prevent the spread of infection: The endocrine system plays a role in the body's immune response. Hormones like cortisol can help to reduce inflammation and prevent the spread of infection. However, excessive use of corticosteroids can suppress the immune system and increase the risk of infection.

An example of great work in the mock examinations for business GCSE:

(18) Evaluate, with reference to the data in Text 3, whether Shire Ltd should merge with Listering Motors Ltd.

I think that Shire Ltd should not merge with Listering Motors Ltd. Because they have a very different product range, whereas Listering Motors Ltd only has a 20% capacity, whereas Shire Ltd has a 100% capacity. Also, the car washes connected to the economy, given the high prices on Leathers, which Shire offers, therefore, and they would not receive more profits from merging with them as they only have basic car washes, which would not attract customers as much as Shire's, because of prices.

However, on the other hand, for Shire merging with Listering Motors Ltd, Listering Motors Ltd has a car wash, which would attract more customers. This would mean Shire Ltd, not only a 100% capacity, but also a 20% capacity. They also receive income from selling cars, but also more the owners would have less work, as Shire Ltd would be the one to handle the car washes.

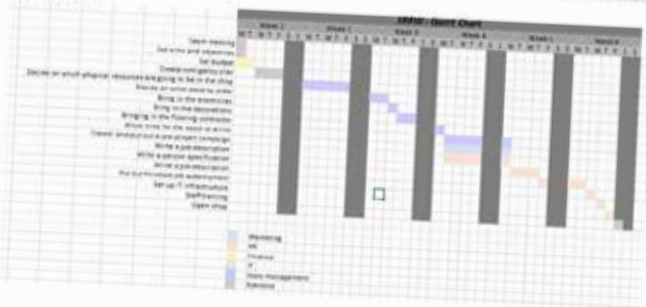
Therefore, Shire Ltd should not merge with Listering Motors Ltd. Because it is currently more successful, and selling cars, which is a 100% capacity, and they currently have the most car washes in the area. Also, they would not be significantly affected from 20% to 100% capacity. Therefore, Shire Ltd should not merge with Listering Motors Ltd. Because it is currently more successful, and selling cars, which is a 100% capacity, and they currently have the most car washes in the area.

Knowledge? Understanding? (3) (4) (5)

END OF QUESTION PAPER

BUSINESS STUDIES

Gantt Chart



Budget and costings

SRRW have a very tight budget of £20,000 to set up their shop, so a detailed plan to show where this money is going to go will be needed, this can be split between contractors, stock and physical resources.

Item	Cost
Contractors	
Flooring	£200
Electrician	£400
Decorators	£200
People to install the changing room curtain and look at creating an inventory room	£1000
Stock	
All swimming stock (assume ordering of 50 items of each item in the Stock for Sale heading)	£1500
All running stock (assume ordering of 40 items of each item in the Stock for Sale heading)	£5400
All riding stock (assume ordering of 50 items of each item in the Stock for Sale heading)	£1800
Physical resources	
Mannequins	£5273.45, already calculated due to research
Marketing	£900



P3 - Explain how businesses measure the impact of their marketing, using at least two contrasting businesses

The first business chosen is Barleycorn. The Barleycorn Café is a local, small-scale business currently in Mildenhall, which opened in 2017 and it is a private limited company owned by Shelby Foord. It had two branches in Mildenhall; one in the town centre, and the other in the Mildenhall hub - containing a leisure centre, swimming pool, school, library, and more. Another branch is set to open on the 25th of April in another leisure centre in Brandon, a town approximately 10 miles away from the current location of Mildenhall. The Café offer a wide range of products, including teas, coffees, sandwiches, cakes, and many more. They offer alternate options of their products including vegan, vegetarian and gluten-free. Multiple different services are also offered, this includes afternoon tea, hampers, lunch boxes, and sweet treat boxes, as well as roast dinners and seasonal events, for example Christmas and new year parties in the recent past few months, and a planned Mother's Day dinner in March. The impact of their marketing is now going to be discussed.

Barleycorn Mildenhall - Facebook

Good luck to all of our A-level students who are sitting their exam results today! We've got a few treats for you.

Head on over to Barleycorn Mildenhall with your results papers for a FREE Hot Chocolate & Cream & Sherry or a FREE Cake!

Open 9-5 Mon - 5:30pm Sat - 12pm Sun - 12pm

Open 9-5 Mon - 5:30pm Sat - 12pm Sun - 12pm

Open 9-5 Mon - 5:30pm Sat - 12pm Sun - 12pm

Open 9-5 Mon - 5:30pm Sat - 12pm Sun - 12pm

Open 9-5 Mon - 5:30pm Sat - 12pm Sun - 12pm

Open 9-5 Mon - 5:30pm Sat - 12pm Sun - 12pm

Open 9-5 Mon - 5:30pm Sat - 12pm Sun - 12pm

Open 9-5 Mon - 5:30pm Sat - 12pm Sun - 12pm

Open 9-5 Mon - 5:30pm Sat - 12pm Sun - 12pm

Open 9-5 Mon - 5:30pm Sat - 12pm Sun - 12pm

Open 9-5 Mon - 5:30pm Sat - 12pm Sun - 12pm

Open 9-5 Mon - 5:30pm Sat - 12pm Sun - 12pm

Open 9-5 Mon - 5:30pm Sat - 12pm Sun - 12pm

Open 9-5 Mon - 5:30pm Sat - 12pm Sun - 12pm

Open 9-5 Mon - 5:30pm Sat - 12pm Sun - 12pm

Open 9-5 Mon - 5:30pm Sat - 12pm Sun - 12pm

Open 9-5 Mon - 5:30pm Sat - 12pm Sun - 12pm

Open 9-5 Mon - 5:30pm Sat - 12pm Sun - 12pm

Open 9-5 Mon - 5:30pm Sat - 12pm Sun - 12pm

One way that the impact of their marketing is measured is by looking at the levels of sales revenue and number of customers that have been visiting the stores after a promotion has been advertised online. For example, to the left shows a promotion from 2022 for A-level results day. This included students being able to get a free hot chocolate and a free cake when they entered the shop with their own exam results. This promotion used a method to include both the café in the town centre and the one in the hub, which resulted in an increased revenue and number of customers for both branches, not only one of them. As a result of this, levels of customers were looked at which had clearly increased in comparison to the same time the previous year and weeks before this time. Sales revenue had also increased significantly as the free products had encouraged others to purchase products alongside the free items, and the shops were reported as remarkably busy in comparison to their normal footfall. For example, if 15 customers entered each of the locations and had an average spend of approximately £5, revenue could have increased by 30 customers * £5 totalling £150, which is a significant increase for just one day of promotion.

Another way that Barleycorn can measure their marketing success is by looking at online reviews on websites such as TripAdvisor and Google, to see if they have been effective. For example, frequently positive reviews and feedback from offering roast dinners, which had been promoted in both Instagram and Facebook online suggested that the correct platforms were chosen to advertise on, as Barleycorn has been fully booked for events like this in many recent weeks. As a result of the success, Barleycorn have planned a special Mother's Day roast dinner in March, which is likely to be fully booked quickly. Reviews include both quantitative and qualitative data such as a 5-star



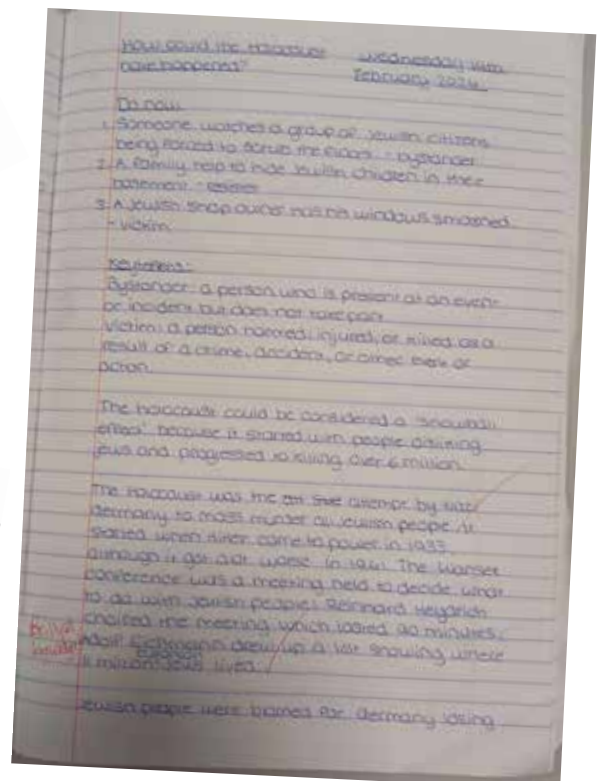
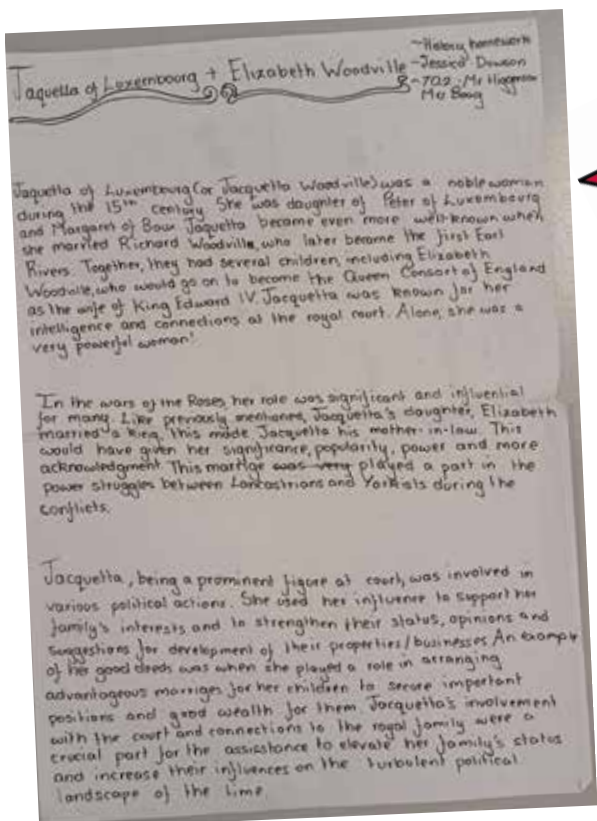
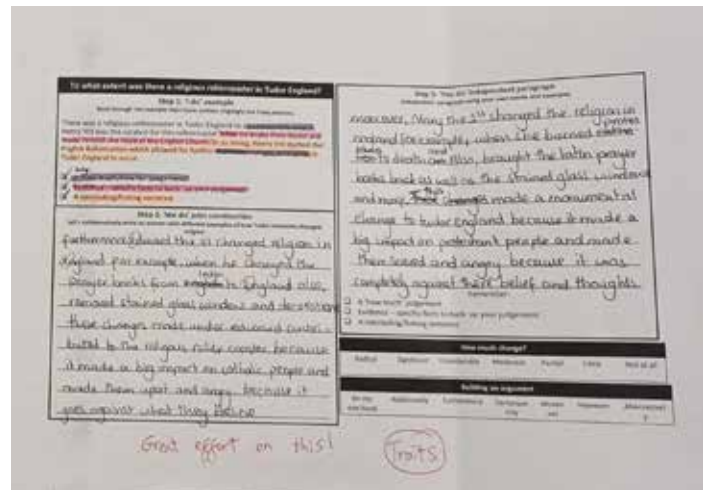

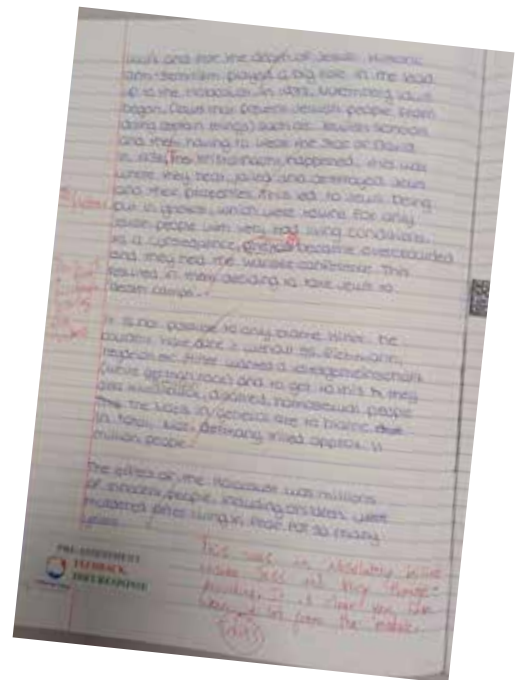
Opposite is the described promotion, again also offering alternative options such as vegetarian and vegan for those with dietary requirements. Seasonal events such as these also help increase the revenue as discussed earlier on, for example the spaces for this event may be limited to people for example, and with a set price of £35, this would already result in a sales revenue of an additional £350. Choosing to use social media for these promotions also allows for people to like and share the post to family and friends, which will spread the word of the events taking place and further increase the rate of bookings. Comments also allow customers to give feedback on what they think of the event and ask any questions that they may have about it too. As these events have had many positive reviews, the reputation of Barleycorn has been increased and as a result of this, additional sales and visits from customers can take place.

In comparison, the second business chosen is Domino's. Domino's is a large-scale public limited company, operating in 95 different countries in the world, which the first was opened in 1960, originally in America, and now has over 1,200 stores in the UK which the first opened in 1985, and now in total over 20,000 worldwide. They offer a range of pizzas, sides, and desserts, depending on the country that each store is located, and with toppings varying on common foods in that area too. Domino's also have their own app, where customers can order online to collect from the nearest store to them or get their products delivered to their house, which is an example of something that Barleycorn does not offer. From their annual report and accounts in 2021, it has clearly been stated that the market for both food collection and delivery has increased significantly and is continuing to do so, allowing Domino's to specifically identify multiple strategies, such as opening new stores across the UK each year to help increase their market share from 6.8% in 2021.

One way that the impact of their marketing is measured is by looking at website data, such as the number of people visiting the website in comparison to previous months, the average time that people are spending on the website, and the bounce rate - the percentage of visitors that only look at one page before leaving the website. For example, for the Domino's website in the UK, in January 2024, there was a total of 3.9 million visits with a bounce rate of 40.23%, and an average amount of time spent on the website was at 6 minutes per visitor. This data allows Domino's to monitor levels of website visits when a promotion for a new product/seasonal product is introduced, for example the festive Christmas pizza, or the new loaded fries products which were recently introduced to the menu, allowing them to decide whether the launch of the products has been successful or not. It also allows for Domino's to spot trends within the market and their data, and when visits may be



HiSTORY





A hand-drawn map of the African continent on lined paper. The map is annotated with numerous labels and arrows pointing to specific regions or features. The labels include:

- Algeria** (pointing to the northwestern tip)
- Libya** (pointing to the northern coast)
- Chad Lake** (pointing to the central lake region)
- Senegal** (pointing to the western coast)
- Sierra Leone** (pointing to the western coast, south of Senegal)
- Liberia** (pointing to the western coast, south of Sierra Leone)
- Ivory Coast** (pointing to the western coast, south of Liberia)
- Ghana** (pointing to the western coast, south of Ivory Coast)
- Upper Volta** (pointing to the central region, north of Chad Lake)
- Niger** (pointing to the central region, south of Upper Volta)
- Chad** (pointing to the central lake region)
- Cameroon** (pointing to the central region, south of Chad Lake)
- DR Congo** (pointing to the central region, south of Cameroon)
- South Africa** (pointing to the southern tip)
- Swaziland** (pointing to the southern tip, east of South Africa)
- Lesotho** (pointing to the southern tip, west of Swaziland)
- Botswana** (pointing to the southern region, west of South Africa)
- Malawi** (pointing to the southern region, east of Botswana)
- Zambia** (pointing to the southern region, west of Malawi)
- Mozambique** (pointing to the southern region, east of Zambia)
- Angola** (pointing to the southern region, west of Namibia)
- Namibia** (pointing to the southern region, east of Angola)
- South Africa** (pointing to the southern tip)
- Swaziland** (pointing to the southern tip, east of South Africa)
- Lesotho** (pointing to the southern tip, west of Swaziland)
- Botswana** (pointing to the southern region, west of South Africa)
- Malawi** (pointing to the southern region, east of Botswana)
- Zambia** (pointing to the southern region, west of Malawi)
- Mozambique** (pointing to the southern region, east of Zambia)
- Angola** (pointing to the southern region, west of Namibia)
- Namibia** (pointing to the southern region, east of Angola)

Mexicans Causing
Crime Friday 7.9.10 (Mon)

Personal feelings of the
Mexican coming along and
being their own can have
the most concern by the
State.

I am annoyed in being
made to work too long
the drive there means
having high pay and
"do you feel they are going
forward here?"
Yet their talking on the
radio C16 v. C2000.

You heard it for years
and it is common to be
there now. One feeling about
the Mexicans this is that
a few people who on the
Mexican side.

I am confused for
American crime rate &
flying up by drug crime
and more since the Mexican
could be smuggling them
to America.


This is the Mexican
and American border.

They have two from
an American mother saying
from the bottom the
crime rate flying in her
local area. Flying across
for drug crime or smuggling
them into America. But
do you see.

Many Mexicans can
speak fluent English
which can cause trouble
if they talk in their
own language to the
border line.

but do you
agree?

American
Crime.

[illegible][illegible]



GEOGRAPHY



Page Picturesdonon

Homework - What is my Local Geography

Complete the series of mini tasks below, by placing yourself just outside your front door.

Task 1: Complete the overview below
 Date of homework completed: 16.11.21
 Time of homework completed: Afternoon
 Location: Salford
 Brief description of the weather conditions: cloudy and some light rain

Task 2: In the space opposite, sketch what you can see outside your front door.

Task 3: Label your image to illustrate the physical and human geography within it.

Task 4: Complete the pedestrian count for a total of 2 minutes by tallying the people that pass in both directions.

Task 5: Complete the Environmental Quality Survey (EQS) by placing a tick into the correct column using the 1-5 scale (1 = negative, 3 = average, 5 = positive).

Pedestrian Count					
Time of Day:				Tally	Total
	1 pm				
Number of people walking left:				○	○
Number of people walking right:				○	○

Environmental Quality Survey (EQS)						
Negative experience	1	2	3	4	5	Positive experience
Busy					✓	Quiet
Built environment poorly maintained					✓	Built environment well maintained
Facilities & roads poorly maintained					✓	Facilities & roads well maintained
Litter visible			✓			Potholes/grooves
Unpleasant odours					✓	No litter
Unpleasant sights					✓	No graffiti
Street furniture broken					✓	Street furniture well maintained
Flower beds & trees absent				✓		Flower beds & trees present
Total EQS Score	3.5		/40			

Complete the series of mini tasks below, by placing yourself just outside your front door.

Task 1: Complete the exercise below
 Date of homework completed: 24 November 2023
 Time of homework completed: 6:10pm
 Location: Moat Close Mill Lane, Boreham
 Brief description of the weather conditions: cloudy, cool, with falling drizzle

Task 2: In the space opposite sketch what you can see outside your front door.

Task 3: Label your image to illustrate the physical and human geography within it.

Task 4: Complete the pedestrian count for a total of 2 minutes by tallying the people that pass in both directions.

Task 5: Complete the Environmental Quality Survey (EQS) by placing a tick into the correct column using the 0-5 scale (0 = negative, 3 = average, 5 = positive).

Pedestrian Count		Tally		Total
Time of Day:	<u>16:40-17:00</u>			
Number of people walking left:	<u>1</u>			<u>1</u>
Number of people walking right:	<u>1</u>			<u>1</u>

Environmental Quality Survey (EQS)						
Negative experience			Positive experience			
1 2 3 4 5			0 1 2 3 4 5			
Notes						Quiet
Built environment poorly maintained						Built environment well maintained
Footpaths & roads poorly maintained						Footpaths & roads well maintained
Litter issues						Pedestrian issues
Litter absent						No litter
Vandalism evident						No vandalism
Street Furniture broken						Street Furniture well maintained
Flower beds & trees absent						Flower beds & trees present
Total EQS Score	<u>10/40</u>					

Land

Land use is the way in which land is used. It is the way in which the land is managed and used.

Land use is determined by a number of factors, including:

- Physical factors (e.g. topography, climate, soil)
- Human factors (e.g. population, technology, culture)

Land use can be classified into two main categories:

- Primary land use** (e.g. agriculture, forestry, fishing)
- Secondary land use** (e.g. industry, urban, recreation)

Coastal Land Use








Coastal land use is the way in which land is used along the coast. It is the way in which the land is managed and used.

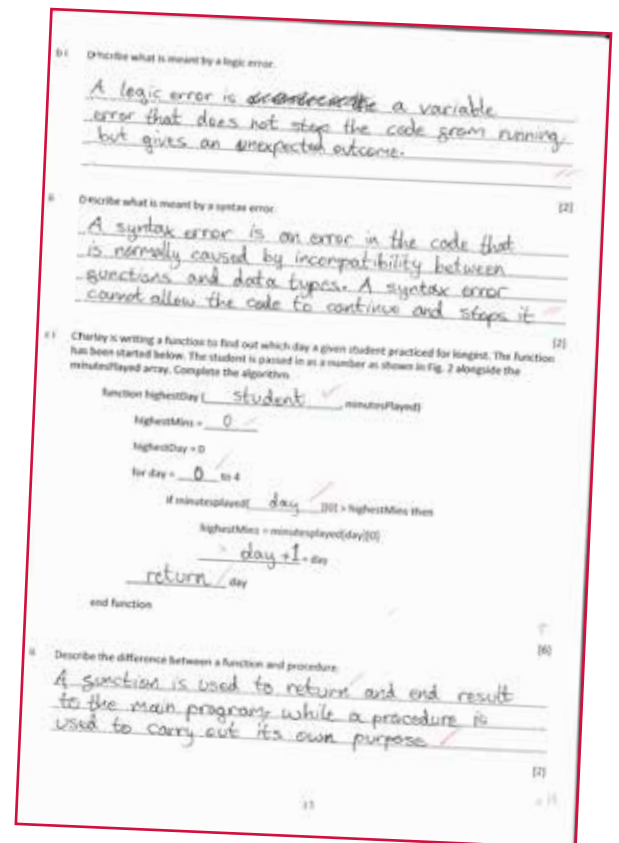
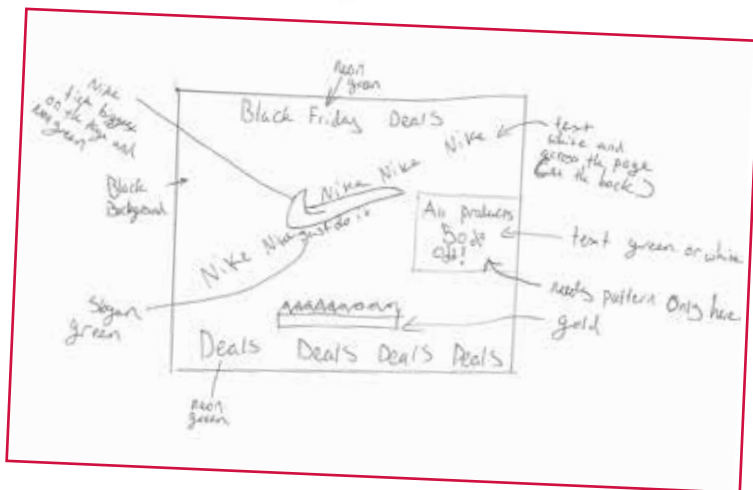
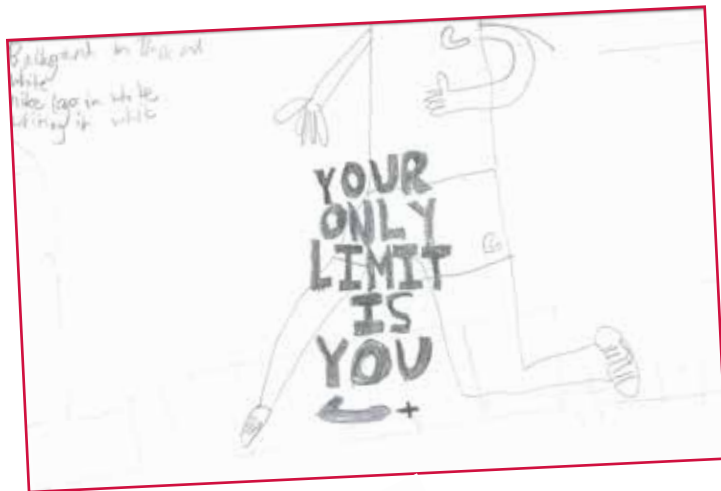
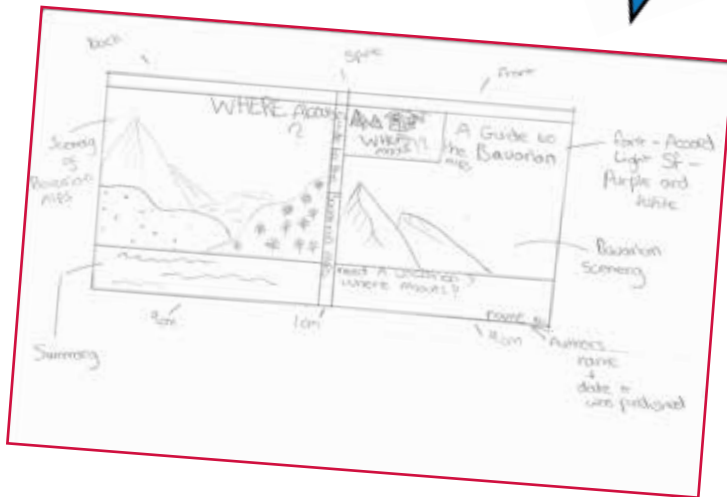
Coastal land use is determined by a number of factors, including:

- Physical factors (e.g. topography, climate, soil)
- Human factors (e.g. population, technology, culture)

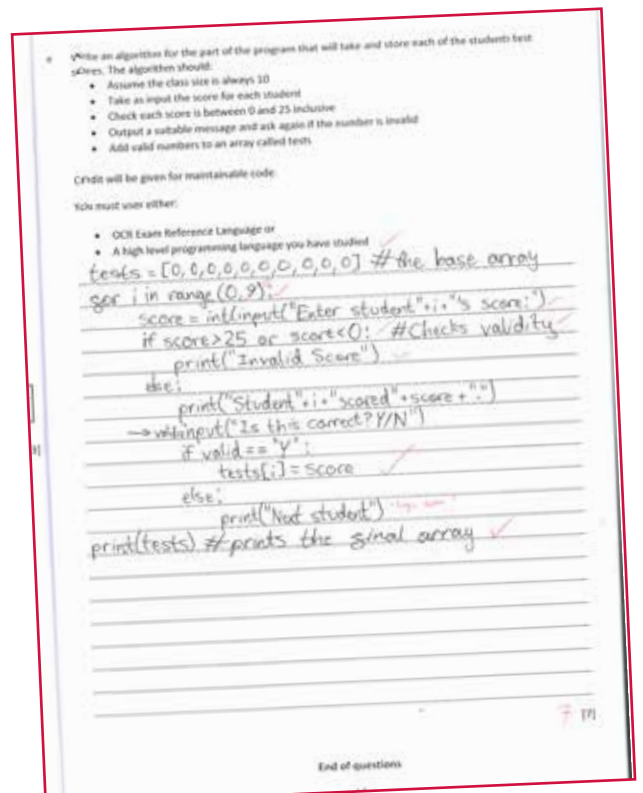
Coastal land use can be classified into two main categories:

- Primary coastal land use** (e.g. fishing, aquaculture)
- Secondary coastal land use** (e.g. tourism, industry, urban)

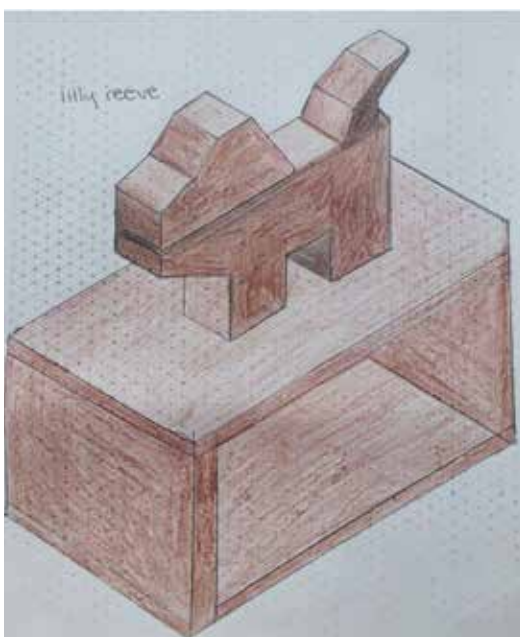
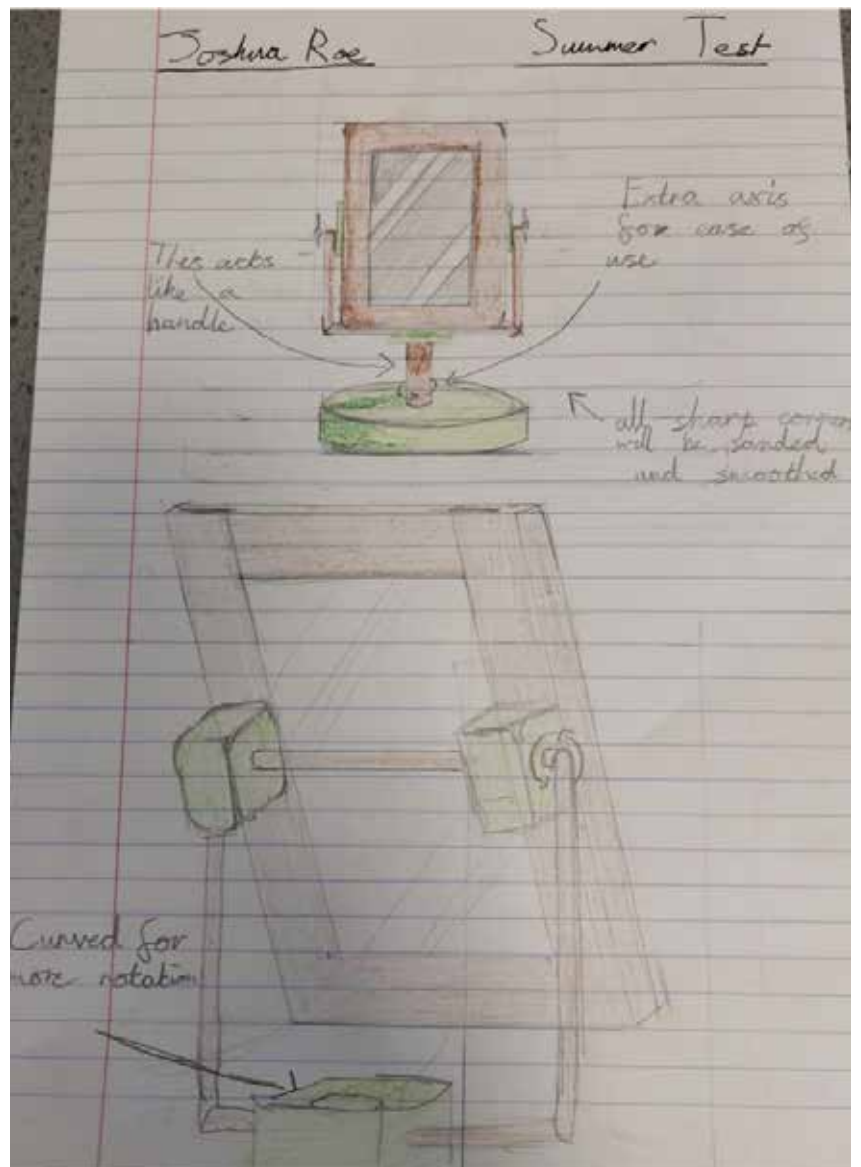


	Sunday	Monday	Tuesday	Wednesday	Thursday	Friday	Saturday
What was the weather like? (Consider temperature, cloud cover, and wind.)	The temperature is about 15°C. It started to sunny but the wind is strong.	The temperature is between 15°C and 20°C. The wind is strong from the north.	Temperature is 15°C. It is sunny and warm.	Temperature is 15°C. It is sunny and warm.	The temperature is 15°C. It is sunny and warm.	The temperature is 15°C. It is sunny and warm.	The temperature is 15°C. It is sunny and warm.
Draw some of the weather symbols that are used on the television weather forecast to best represent the day							
How did the weather affect everything? You could think about how it affected: • what you wore; • what you ate and drank; • how you traveled; • how you felt;	I am wearing a jacket and a hat. I had a hot drink and I felt warm.	I wore my jacket and a hat. I had a hot drink and I felt warm.	I am not wearing a jacket and a hat. I had a hot drink and I felt warm.	I am wearing a jacket and a hat. I had a hot drink and I felt warm.	I am wearing a jacket and a hat. I had a hot drink and I felt warm.	I am wearing a jacket and a hat. I had a hot drink and I felt warm.	I am wearing a jacket and a hat. I had a hot drink and I felt warm.



COMPUTING



DESIGN TECHNOLOGY



FOOD TECHNOLOGY





FOOD TECHNOLOGY